


Word-Problem Schemas

TOTAL

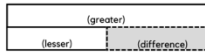
Are parts put together for a total?



$$P1 + P2 = T$$

DIFFERENCE

Are two amounts compared for a difference?



$$G - L = D$$

CHANGE

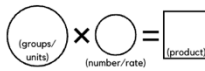
Does a starting amount increase or decrease to a new amount?



$$\begin{aligned} & \text{(increase)} \quad ST + C = E \\ & \text{or} \\ & \text{(decrease)} \quad ST - C = E \end{aligned}$$

EQUAL GROUPS

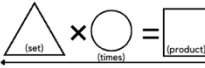
Are there groups with an equal number in each group?



$$GR \times N = P$$

SET/COMPARISON

Is a set compared a number of times?




$$S \times T = P$$

Word-Problem Schemas

TOTAL

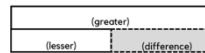
Are parts put together for a total?



$$P1 + P2 = T$$

DIFFERENCE

Are two amounts compared for a difference?



$$G - L = D$$

CHANGE

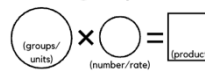
Does a starting amount increase or decrease to a new amount?



$$\begin{aligned} & \text{(increase)} \quad ST + C = E \\ & \text{or} \\ & \text{(decrease)} \quad ST - C = E \end{aligned}$$

EQUAL GROUPS

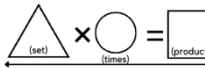
Are there groups with an equal number in each group?



$$GR \times N = P$$

SET/COMPARISON

Is a set compared a number of times?

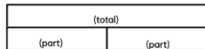


$$S \times T = P$$

Word-Problem Schemas

TOTAL

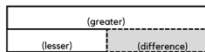
Are parts put together for a total?



$$P1 + P2 = T$$

DIFFERENCE

Are two amounts compared for a difference?



$$G - L = D$$

CHANGE

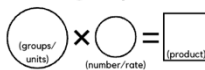
Does a starting amount increase or decrease to a new amount?



$$\begin{aligned} & \text{(increase)} \quad ST + C = E \\ & \text{or} \\ & \text{(decrease)} \quad ST - C = E \end{aligned}$$

EQUAL GROUPS

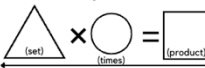
Are there groups with an equal number in each group?



$$GR \times N = P$$

SET/COMPARISON

Is a set compared a number of times?

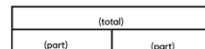


$$S \times T = P$$

Word-Problem Schemas

TOTAL

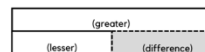
Are parts put together for a total?



$$P1 + P2 = T$$

DIFFERENCE

Are two amounts compared for a difference?



$$G - L = D$$

CHANGE

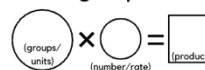
Does a starting amount increase or decrease to a new amount?



$$\begin{aligned} & \text{(increase)} \quad ST + C = E \\ & \text{or} \\ & \text{(decrease)} \quad ST - C = E \end{aligned}$$

EQUAL GROUPS

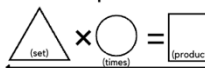
Are there groups with an equal number in each group?



$$GR \times N = P$$

SET/COMPARISON

Is a set compared a number of times?



$$S \times T = P$$